



Monday level 2 fluency

- 1) Complete the statements and colour in the 100 square correctly.

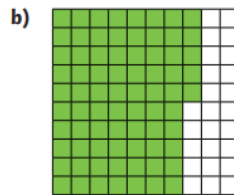
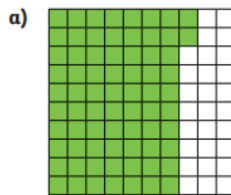


- a) There are _____ parts per 100 shaded.
There is _____% shaded.



- b) There are 64 parts per 100 shaded.
There is _____% shaded.

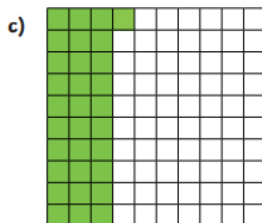
- 2) Which square would show 100% if I shaded another 25 parts per hundred?



- 3) Put these percentages in order, from the smallest to the largest value percentage represented.




b) 3%



d) 34 parts per 100

- 4) Colour in this 100 square so that it matches this statement:

Between 84 parts per 100 and 90% of this 100 square are shaded.



- Dexter has £1 to spend.
He buys some stickers.



I got 35p change.



What percentage of his money did Dexter spend?