




4. Circle the odd one out.

A.  B. 

C.  D. 60%

Explain your reasoning.

5. Order the values from largest to smallest by placing the letters in the boxes below.

A. 64 parts per 100      B. 38%      C. 7 parts out of 10

D. 90%      E. 5 parts per 10      F. 91 parts out of 100

6. Kat and Jake are shown a bar model.



Kat says,  3% is shaded.

Jake says,  30% is shaded.

Who is correct? Convince me.

a) Is 1% of this bar model shaded?



Explain your reasoning.

b) What percentage of each bar model is shaded?

