


WEDNESDAY – LEVEL 1 FLUENCY


1 What fraction, decimal and percentage of each grid is shaded blue?



fraction =

decimal =


percentage =



fraction =

decimal =

percentage =




fraction =


decimal =

percentage =

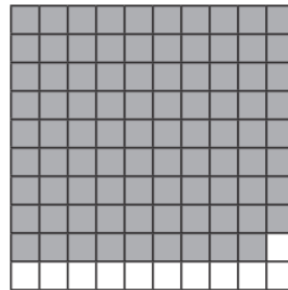
Write the percentage, fraction and decimal represented by the following:



%

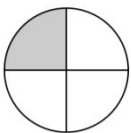


%



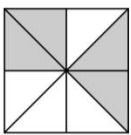
%

Challenge



Tell what part of the circle is shaded.

fraction decimal percent



Tell what part of the square is shaded.

fraction decimal percent



Tell what part of the star is shaded.

fraction decimal percent