
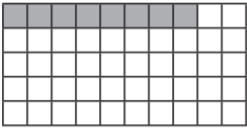






WEDNESDAY - LEVEL 2 FLUENCY

Write the percentage, fraction and decimal represented by the following:

 <input type="text" value=""/> % <input type="text" value="—"/> <input type="text" value=""/>	 <input type="text" value=""/> % <input type="text" value="—"/> <input type="text" value=""/>	 <input type="text" value=""/> % <input type="text" value="—"/> <input type="text" value=""/>
 <input type="text" value=""/> % <input type="text" value="—"/> <input type="text" value=""/>	 <input type="text" value=""/> % <input type="text" value="—"/> <input type="text" value=""/>	 <input type="text" value=""/> % <input type="text" value="—"/> <input type="text" value=""/>

Complete the table.

Decimal	Fraction	Percentage
0.35	$\frac{35}{100}$	35%
0.27		
0.6		
0.06		

Use <, > or = to complete the statements.

0.36 ○ 40%	$\frac{7}{10}$ ○ 0.07
0.4 ○ 25%	0.4 ○ $\frac{1}{4}$

Which of these are equivalent to 60%?

$\frac{60}{100}$	$\frac{6}{100}$	0.06	$\frac{3}{5}$	$\frac{3}{50}$	0.6
------------------	-----------------	------	---------------	----------------	-----