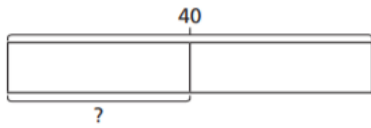
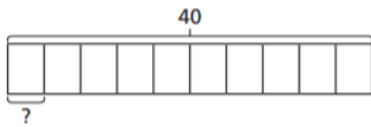


FRIDAY – LEVEL 2 FLUENCY

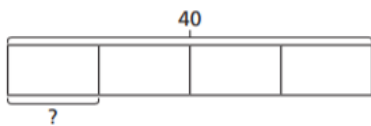
Match each bar model to the statement it represents.



10% of 40

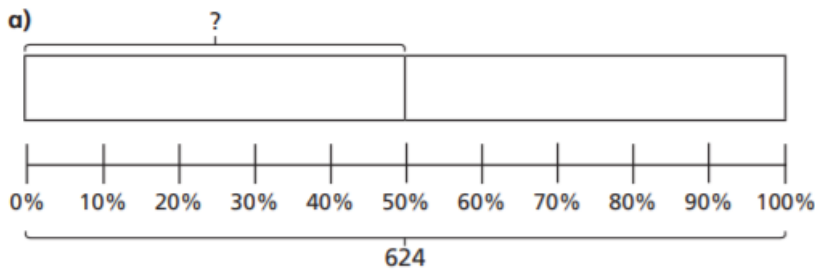


25% of 40

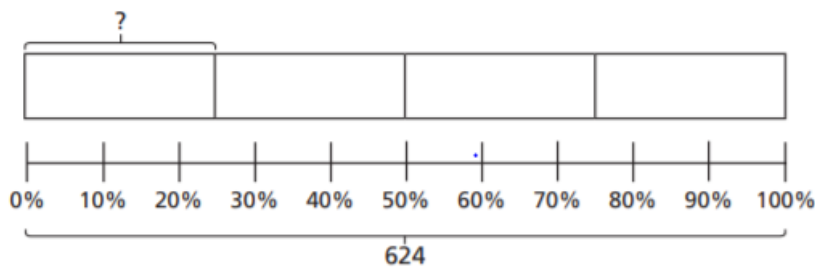


50% of 40

3 Use the bar models to help you complete the calculations.



50% of 624 =



25% of 624 =

What do you notice about your answers?

b) Use bar models to work out the calculations.

50% of 3,420

25% of 3,420

10% of 3,420

Work out:

a) 50% of 90

b) 10% of 90

c) 1% of 90

d) 50% of 35

e) 10% of 35

f) 1% of 35

g) 50% of 240

h) 10% of 240

i) 1% of 240