


24.3.20


LO. To find a non-unit fraction of an amount

Mild challenge 🌶️

$\frac{2}{3}$ of the sweets are yellow.





There are 8 yellow sweets.
How many sweets are in the whole tube?



Hot challenge 🌶️

Miss Morecroft has eaten $\frac{2}{5}$ of the smarties. yum!

She has eaten 6 smarties. 



1. How many smarties were in the tube to start with?
2. What fraction of the smarties are left?
3. How many smarties are left?

Spicy challenge 🌶️

Miss Morecroft says $\frac{6}{3}$ of the smarties are red.

Do you agree?



She also says $\frac{4}{6}$ of the 18 sweets are pink.

Do you agree?