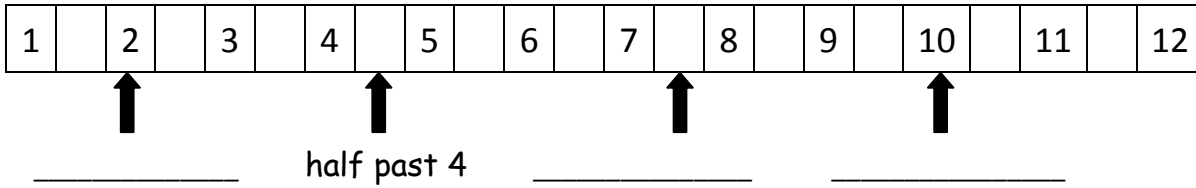


LO. To be able to tell the time to the nearest 5 minutes


What time is each **hour hand** pointing to on the number line below?




Draw the time on each clock.



11 o'clock



half past 4



half past 6



2 o'clock



quarter past 9




quarter past 3



quarter to 5




quarter to 1




5 to 2

5 minutes to 2 o'clock



25 past 11

25 minutes past 11 o'clock



10 to 1

10 minutes to 1 o'clock