


**LO. To be able to interpret data from a scaled pictogram**

**Mild:**

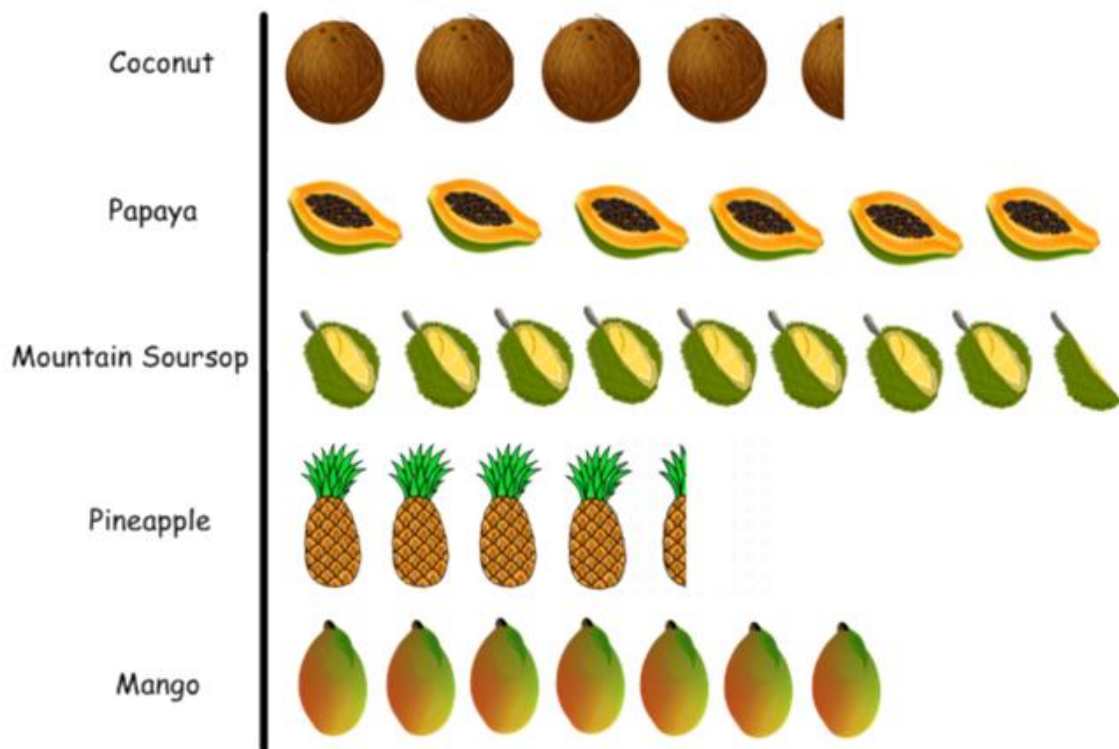


**Key:** Each picture represents 2 pupils' votes

- 1.) What was the **most popular** animal?
- 2.) **How many people** chose the bullet ant?
- 3.) **Which animal** was chosen by 10 people?
- 4.) **How many more people** chose the blue morpho butterfly than the piranha?
- 5.) **How many fewer people** chose the poison dart frog than the bullet ant?
- 6.) 8 people chose the Amazon Spider. What would you need to draw to add this data on the pictogram.

Hot:

A pictogram to show people's favourite rainforest fruit.

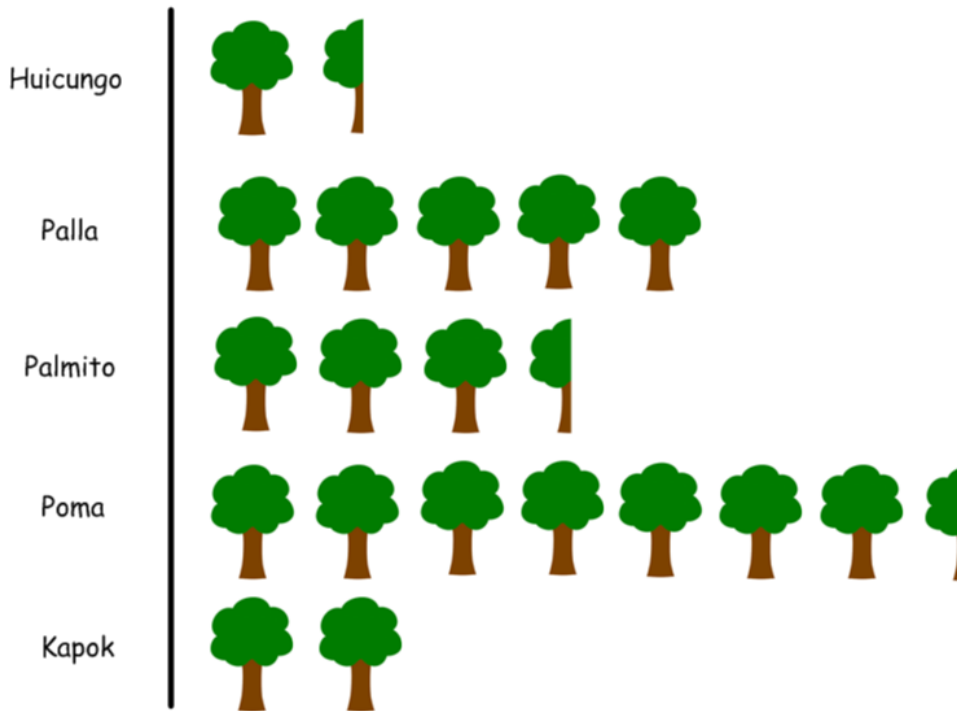


**Key:** Each picture represents 10 pupils' votes

- 1) Which was the most popular fruit?
- 2) How many people voted for pineapple?
- 3) Which fruit was voted for by 70 people?
- 4) How many more people voted for mountain soursop than mango?
- 5) How many fewer people voted for coconut than papaya?
- 6) True or false? More than twice as many people voted for mountain soursop than pineapple.

Spicy:

A pictogram to show types of trees found in the Amazon Rainforest.



**Key:** Each picture represents 100 trees

- 1) How many Poma trees are there?
- 2) How many Poma and Palmito trees are there altogether?
- 3) Which tree has a population of 750?
- 4) How many fewer Huicungo trees are there than Poma trees?
- 5) How many more Kapok trees are there than Huicungo trees?
- 6) Since collecting this data, 50 Palmito trees have been cut down. How many Palmito trees are there now?
- 7) True or false? There are half as many Kapok trees as Palla trees.